

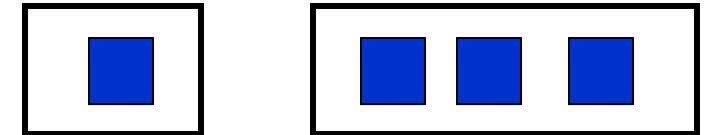
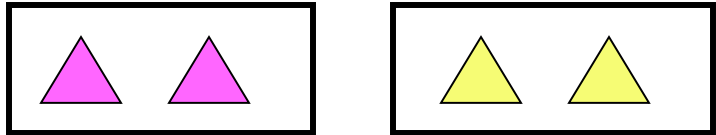
CHÀO MỪNG CÁC THẦY CÔ GIÁO

ĐẾN DỰ GIỜ HỌC

MÔN TOÁN

LỚP 1C

Phép cộng trong phạm vi 4



$$3 + 1 = 4$$

$$2 + 2 = 4$$

$$1 + 3 = 4$$

Bảng cộng trong phạm vi 4

$$3 + 1 = \text{🍏}$$

$$1 + 3 = \text{🍏}$$

$$2 + 2 = \text{🍏}$$

Bảng cộng trong phạm vi 4

$$3 + \text{☆} = 4$$

$$1 + \text{☆} = 4$$


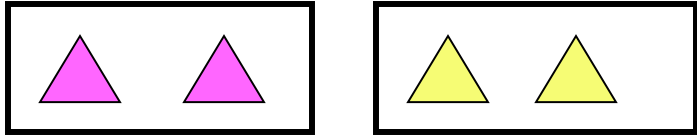
$$2 + \text{☆} = 4$$

Bảng cộng trong phạm vi 4


$$\text{1 duck} + 1 = 4$$

$$1 + \text{1 duck} = 4$$

$$2 + 2 = \text{1 duck}$$



$$\begin{array}{cccc} 3 & + & 1 & = & 4 \\ 2 & + & 2 & = & 4 \\ 1 & + & 3 & = & 4 \end{array}$$



3

4


1

$$\left. \begin{array}{l} 3 + 1 = 4 \\ 1 + 3 = 4 \end{array} \right\} 3 + 1 = 1 + 3 = 4$$



Bài 4: Viết phép tính thích hợp

3	+	1	=	4
---	---	---	---	---



Bảng cộng trong phạm vi 4

$$3 + 1 = \square$$

$$1 + 3 = \square$$

$$2 + 2 = \square$$